

SUMMER MATH  
PRACTICE



Grade 3


Mrs. Henry

Holy Family Regional  
Catholic School

# Week 1

## Monday

1. Write the 10's family on the ducks.



4 + 5 = \_\_\_\_\_      4 + 6 + 2 = \_\_\_\_\_

6 + 4 = \_\_\_\_\_      7 + 4 + 2 = \_\_\_\_\_

8 + 2 = \_\_\_\_\_      6 + 3 + 2 = \_\_\_\_\_

## Wednesday

In each row: circle the smallest number.  
draw a box around the largest number.

157	175	159	174	146	147
182	192	129	196	169	197

4 dimes + 1 nickel = \_\_\_\_\_ ¢

8 dimes + 2 nickels = \_\_\_\_\_ ¢

5 dimes + 7 pennies = \_\_\_\_\_ ¢

2 nickels + 6 pennies = \_\_\_\_\_ ¢

Kasey has 9 dolls. She gives Katie 5 dolls.  
How many dolls does Kasey have left?

\_\_\_\_\_ = \_\_\_\_\_ dolls

53	13	36	43
<u>+ 13</u>	<u>+ 25</u>	<u>+ 12</u>	<u>+ 25</u>


## Tuesday

1. Use the grid on the back of the page to write the numbers from 1 to 100.

Circle the 10's with red.

Underline the 2's with blue.

2.



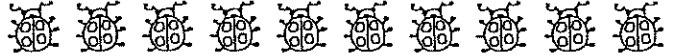
= \_\_\_\_\_ ¢

3. Sarah had 3 nickels. How much money did she have in all? Circle the correct answer.

45¢      10¢      2¢      15¢

## Thursday

1. Circle the fifth ladybug.



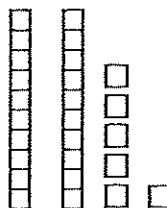
2.

3	7	2	3	5
3	4	8	6	5
+ 3	+ 2	+ 2	+ 3	+ 1



3. Lucas went to the store. He paid 6 pennies for candy and 7 pennies for gum. How much money did he spend? Why? \_\_\_\_\_ + \_\_\_\_\_ = \_\_\_\_\_

4.

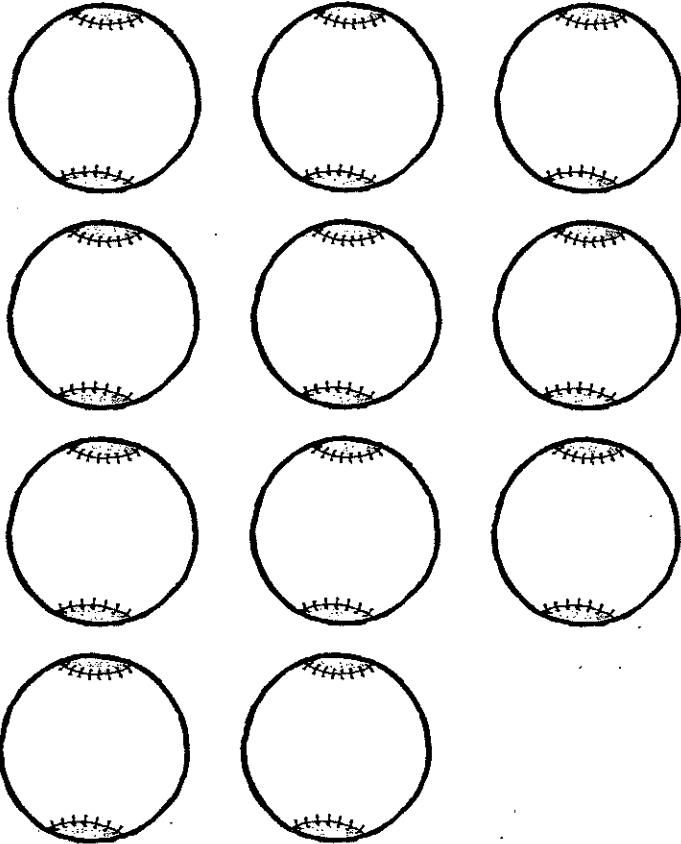


Tens	Ones



Monday

1. Write the 11's family on the balls.




Tuesday

1.

Tens	Ones

2. Write the time.

\_\_\_\_\_ : \_\_\_\_\_



3.

= \_\_\_\_\_ ¢

Wednesday

1. Use the grid on the back of the page to write the numbers from 101 to 200. Circle the 5's with green.

2.

Tens	Ones

3. Count by 2's.

2, 4, 6, \_\_\_\_\_, \_\_\_\_\_, \_\_\_\_\_, \_\_\_\_\_

16, \_\_\_\_\_, \_\_\_\_\_, \_\_\_\_\_, \_\_\_\_\_, 26,

28, \_\_\_\_\_, \_\_\_\_\_, \_\_\_\_\_, \_\_\_\_\_, 38


Thursday

1.  $6 + 1 + 4 =$  \_\_\_\_\_       $9 + 2 + 1 =$  \_\_\_\_\_

$6 + 0 + 5 =$  \_\_\_\_\_       $5 + 4 + 3 =$  \_\_\_\_\_

2. Write the time.

\_\_\_\_\_ : \_\_\_\_\_



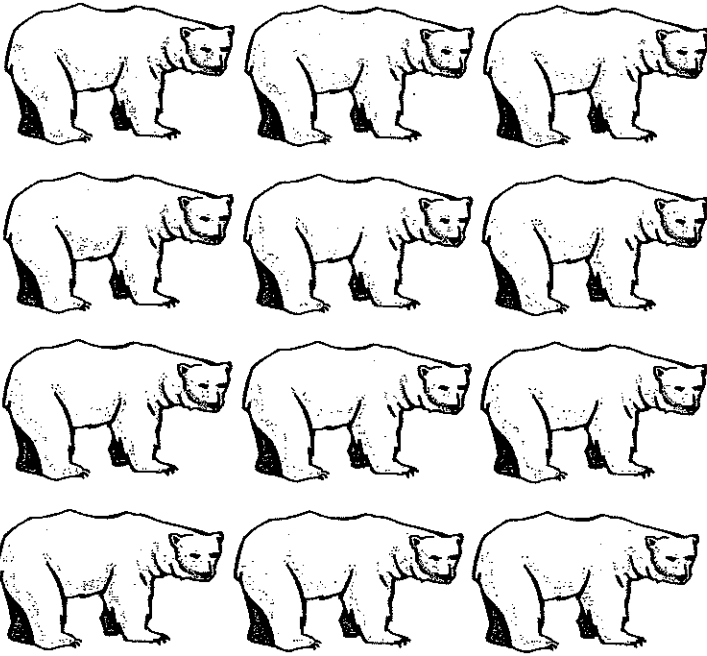
3.

Tens	Ones



Monday

1. Write the 12's family on the bears.



Tuesday

1. Frank had 9 racecars. He bought 3 more. How many racecars does he have in all?

\_\_\_\_\_ = \_\_\_\_\_ racecars

2.  $6 + \underline{\quad} = 9$        $5 + \underline{\quad} = 10$

$7 + \underline{\quad} = 8$        $4 + \underline{\quad} = 7$

$4 + \underline{\quad} = 8$        $2 + \underline{\quad} = 7$

3.



Wednesday

1.  $3 + 8 + 1 = \underline{\quad}$        $5 + 2 + 1 = \underline{\quad}$

$3 + 5 + 2 = \underline{\quad}$        $3 + 6 + 2 = \underline{\quad}$

$4 + 6 + 1 = \underline{\quad}$        $2 + 4 + 1 = \underline{\quad}$

$2 + 2 + 1 = \underline{\quad}$        $4 + 3 + 1 = \underline{\quad}$

$1 + 3 + 1 = \underline{\quad}$        $5 + 5 + 1 = \underline{\quad}$

2. 25 children are playing. 10 children join them. How many children are playing?

\_\_\_\_\_ = \_\_\_\_\_ children

3. Circle the largest number.

- 13    31    38    53    23

Thursday

1. Write the number of tens and ones.

$84 = \underline{\quad}$  tens +  $\underline{\quad}$  ones

$75 = \underline{\quad}$  tens +  $\underline{\quad}$  ones

2.

$85$	$39$	$25$
$- 49$	$+ 46$	$+ 37$

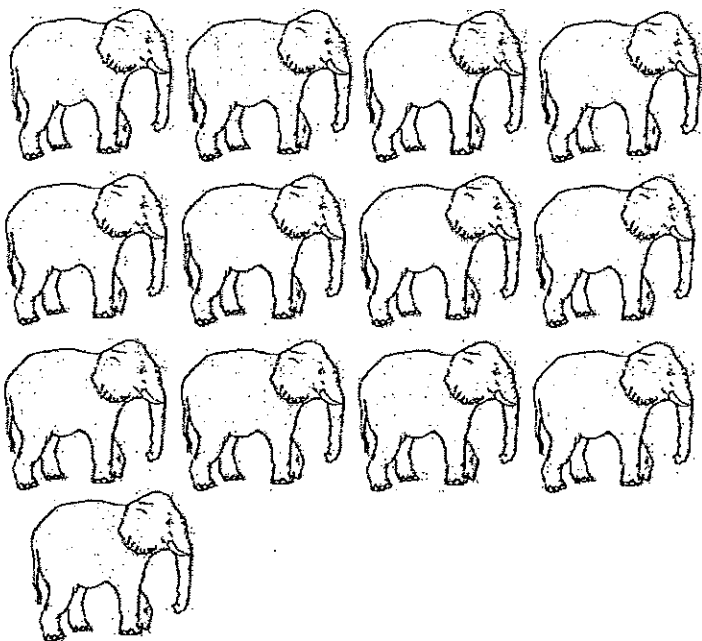
3.

Tens	Ones



Monday

1. Write the 13's family on the elephants.



Tuesday

1. How many cans of soup or fruit does mom have in the house?

\_\_\_\_\_ cans

If each can costs 10¢, how much money do you need to buy them all?

\_\_\_\_\_

2. 5, 10, 15, \_\_\_\_\_, \_\_\_\_\_, \_\_\_\_\_,

\_\_\_\_\_

55, \_\_\_\_\_, \_\_\_\_\_, \_\_\_\_\_, 75

3.  $3 - 3 =$  \_\_\_\_\_  $5 -$  \_\_\_\_\_  $= 1$

Wednesday

1. Nelle read 6 books. Jack read 4 books. How many more books did Nelle read than Jack?

\_\_\_\_\_ more books

Write a number sentence that answers the question.

\_\_\_\_\_ = \_\_\_\_\_

2.  $12 - 7$     $12 - 5$     $11 - 6$     $11 - 5$     $12 - 9$     $12 - 3$



3.  $18 - 6 =$  \_\_\_\_\_  $16 - 7 =$  \_\_\_\_\_

4. \_\_\_\_\_  $+ 5 = 7$    \_\_\_\_\_  $- 3 = 3$

$1 +$  \_\_\_\_\_  $= 9$    \_\_\_\_\_  $+ 2 = 9$

\_\_\_\_\_  $+ 4 = 13$     $5 - 2 =$  \_\_\_\_\_

Thursday

1. Bess spent 9 pennies. Clarke spent 7 pennies. How many more pennies did Bess spend than Clarke? Circle the number sentence that answers the question.


$9 + 7 = 16$

$5 + 2 = 7$

$9 - 7 = 2$

$7 - 2 = 5$

2.  $15 + 4$     $18 + 3$     $12 + 6$     $16 + 5$     $17 + 5$



3. Graham had 12 cookies. Evan gave her 6 more. How many cookies does she have in all?


\_\_\_\_\_ = \_\_\_\_\_ cookies

4.  $8 + 2 + 2 =$  \_\_\_\_\_  $6 + 3 + 2 =$  \_\_\_\_\_

$4 + 4 + 2 =$  \_\_\_\_\_  $3 + 2 + 1 =$  \_\_\_\_\_



Friday - Week 4



It's Friday! Have fun!

Walk around your house.


How many doors are in your house? \_\_\_\_\_ doors

How many windows are in your house? \_\_\_\_\_ windows



Which is the greatest? (Circle one)          doors          windows

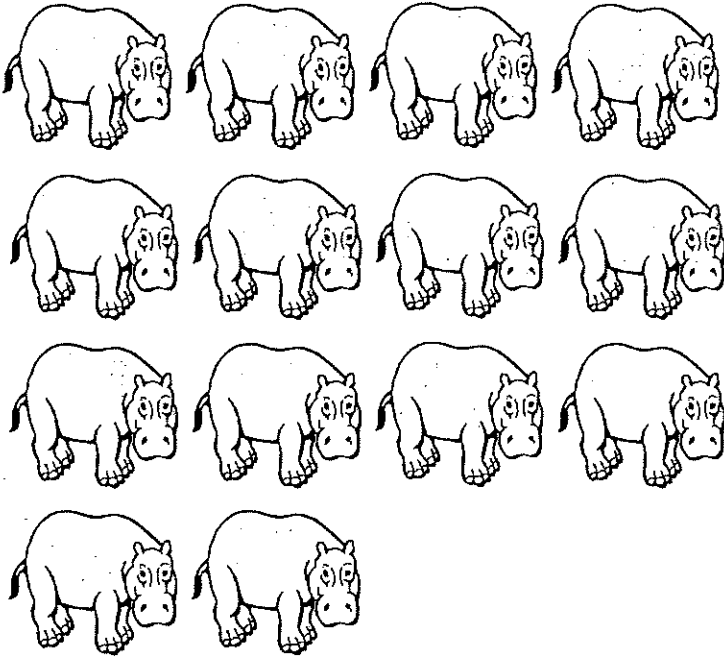
How many greater? \_\_\_\_\_



Don't forget to read  
for 20 minutes,  
five days per week!!!

Monday

1. Write the 14's family on the hippos.



2.  $2 + 11 = \underline{\hspace{2cm}}$        $2 + 4 = \underline{\hspace{2cm}}$

Tuesday

1. Count by 10's.

10, \_\_\_\_\_, \_\_\_\_\_, \_\_\_\_\_, \_\_\_\_\_,  
 \_\_\_\_\_, 70, \_\_\_\_\_, \_\_\_\_\_, \_\_\_\_\_

2. Our favorite colors

	Red	Blue	Green
Schumpert's Class	8	9	2
Jenkin's Class	6	5	7

How many student's in Mrs. Schumpert's class like blue? \_\_\_\_\_ student's  
 How many colors are shown on the chart?  
 \_\_\_\_\_ colors

3. Circle the ninth ice cream cone.




Wednesday

1.  $6 + 7 + 1 = \underline{\hspace{2cm}}$        $3 + 3 + 3 = \underline{\hspace{2cm}}$   
 $5 + 7 + 1 = \underline{\hspace{2cm}}$        $2 + 10 + 2 = \underline{\hspace{2cm}}$   
 $6 + 5 + 1 = \underline{\hspace{2cm}}$        $11 + 2 + 1 = \underline{\hspace{2cm}}$   
 $3 + 4 = \underline{\hspace{2cm}}$        $8 + 3 = \underline{\hspace{2cm}}$

2. Benjamin had 


He gave  away.

How many are left? \_\_\_\_\_'s 





Thursday



Write a number sentence to show how many  in all. \_\_\_\_\_

2.  $26 + 38$        $49 + 28$        $64 + 27$        $93 - 18$        $84 - 26$




Tens	Ones

Friday - Week 5

It's Friday! Have fun!

1. Make a word problem about the kittens. (Ex.: Maggie had 12 kittens...) Solve the problem.



Handwriting practice lines consisting of a solid top line, a dashed middle line, and a solid bottom line. There are four sets of these lines provided for writing the answer to the first problem.

2. Find something in your house (books, balls, toys, etc...) Make a word problem about them below. Solve your problem.

Handwriting practice lines consisting of a solid top line, a dashed middle line, and a solid bottom line. There are four sets of these lines provided for writing the answer to the second problem.

Monday

1. Get someone to time you. See how many you can finish on the addition speed test in five minutes. Practice this test this summer. See if you can beat your time.

2. Circle the smallest number in each row. Draw a box around the largest number.

147	138	174	118	116	128
103	143	141	103	153	130
199	168	178	146	135	174

3. Write the number before and after.

\_\_\_\_\_ 159 \_\_\_\_\_      \_\_\_\_\_ 149 \_\_\_\_\_

\_\_\_\_\_ 136 \_\_\_\_\_      \_\_\_\_\_ 132 \_\_\_\_\_

\_\_\_\_\_ 103 \_\_\_\_\_      \_\_\_\_\_ 112 \_\_\_\_\_

Tuesday



Write a number sentence to show how many

s in all. \_\_\_\_\_

2. Mother was making fruit salad. She used 5 apples, 6 oranges, and 3 pears. How much fruit did she use? Why?

\_\_\_\_\_

3.  $8 + \underline{\hspace{1cm}} = 12$        $10 + \underline{\hspace{1cm}} = 13$

$\underline{\hspace{1cm}} + 1 = 8$        $3 + \underline{\hspace{1cm}} = 9$

Wednesday

1. Riley dropped her papers on the floor. She picked up 4 papers. Hayden helped her to pick up 3 more. There were no papers left on the floor. How many papers did Riley drop? Why?

\_\_\_\_\_

2. 5 dimes + 4 pennies = \_\_\_\_\_ ¢

2 dimes + 1 nickel = \_\_\_\_\_ ¢

7 dimes + 1 nickel = \_\_\_\_\_ ¢

1 quarter = \_\_\_\_\_ ¢

2 quarters = \_\_\_\_\_ ¢

3 quarters = \_\_\_\_\_ ¢

Thursday

1. There are 3 buildings on the street. 17 people are in the first building. 15 people are in the second building.

How many more people are in the first building? Why?

\_\_\_\_\_

How many people are in both buildings together? Why?

\_\_\_\_\_

Which sentence do you not need to do this?

\_\_\_\_\_

\_\_\_\_\_

## Friday - Week 6

It's Friday! Have fun!

Find some blocks, buttons, or money. Make a pattern on the table or floor.

Make a pattern below using red, white and blue. Keep it going several times around.

## Week 7

### Monday

1. Get someone to time you. See how many you can finish on the subtraction speed test in five minutes. Practice this test this summer. See if you can beat your time.

2. 259 has \_\_\_\_\_ ones

87 has \_\_\_\_\_ hundreds

209 has \_\_\_\_\_ tens

137 has \_\_\_\_\_ ones

3. Write the time.

\_\_\_\_\_ : \_\_\_\_\_



### Tuesday

1. Anna loved stuffed animals. She had 7 dogs, 2 cats, and 5 bears. How many stuffed animals did Anna have in all? Why?

\_\_\_\_\_

2. Draw a line to match.

50¢	8 dimes
30¢	8 nickels
40¢	3 dimes
80¢	5 dimes

3.      25          65          45          72          39

+ 13	+ 23	+ 13	+ 17	+ 10
□	□	□	□	□

### Wednesday

1. Thomas had saved 1 nickel for candy. His mother gave him 6 pennies. How many cents does Thomas have now? Why?


\_\_\_\_\_

2. The girls were helping their teacher collect the books. Stefanie brought 4 books, Brooke brought 6 books, and Ellie brought 3 Books. How many books did the girls collect? Why?

\_\_\_\_\_

3. Write the time.

\_\_\_\_\_ : \_\_\_\_\_



### Thursday

1.  $5 + \underline{\quad} = 8$                    $6 + \underline{\quad} = 10$

$3 + \underline{\quad} = 7$                            $3 + \underline{\quad} = 11$

$7 + \underline{\quad} = 9$                            $9 + \underline{\quad} = 12$

2. Eliza counted her dresses. She had 7 school dresses, 2 Sunday dresses, and 1 party dress. How many dresses does Eliza have in all? Why?

\_\_\_\_\_

3.      75          14          65          80


+ 14	+ 32	+ 31	+ 15
□	□	□	□

4.



= \_\_\_\_\_ ¢

## Friday - Week 7



It's Friday! Have fun!

Go to the store with mom or dad. Pretend you have two dollars (\$2.00) or eight quarters or 20 dimes. What can you buy? Write down what you can buy and how much it costs? (Try candy!)

## Week 8

### Monday

- Practice addition and subtraction speed tests.
- What is today's date? (Include the month)

How many days are in a week? \_\_\_\_\_

How many months are in a year? \_\_\_\_\_

What month does school begin?

\_\_\_\_\_

How many more days until school starts?

\_\_\_\_\_

3.	28	39	47	62	81
	+ 46	+ 25	+ 38	- 27	- 29

--	--	--	--	--


### Wednesday

1. $4 + 5 + 2 =$ _____	$3 + 4 + 2 =$ _____
$7 + 3 + 1 =$ _____	$5 + 2 + 2 =$ _____
$3 + 3 + 2 =$ _____	$1 + 8 + 2 =$ _____
$7 + 1 + 2 =$ _____	$7 + 3 + 2 =$ _____

- Henry likes toy cars. He has 4 sports cars, 3 fire trucks, and 2 cement mixers. How many cars does he have? Why?
- \_\_\_\_\_

3.  = \_\_\_\_\_ ¢

### Tuesday

1.  = \_\_\_\_\_ ¢

- Katherine's mother was making her a dress. The pins spilled on the floor. Katherine found 11 pins. Her brother found 2 more. How many pins did they both find? Why?
- \_\_\_\_\_

- 138 is \_\_\_\_\_ hundred, \_\_\_\_\_ tens, and \_\_\_\_\_ ones.  
55 is \_\_\_\_\_ hundred, \_\_\_\_\_ tens, and \_\_\_\_\_ ones.

4.  $75¢ =$  \_\_\_\_\_ quarters  
 $\$1.00 =$  \_\_\_\_\_ quarters  
 $80¢ =$  \_\_\_\_\_ dimes

### Thursday

- Patrick had 2 nickels. His father gave him 2 more cents. How many cents did Patrick have then? Why?
- \_\_\_\_\_

2.  = \_\_\_\_\_ ¢

- Emily was helping her mother set the table. Emily put out 5 forks and 5 spoons. How many things did she put out? Why?
- \_\_\_\_\_

4.  $15¢ =$  \_\_\_\_\_ nickels       $50¢ =$  \_\_\_\_\_ dimes  
 $13¢ =$  \_\_\_\_\_ pennies       $70¢ =$  \_\_\_\_\_ dimes





Friday - Week 8



It's Friday! Have fun!

Write down 5 to 7 telephone numbers that you know. (If you don't know that many, look in the telephone book.) Now add the numbers in each one.

Who has the largest sum? \_\_\_\_\_

Who has the smallest sum? \_\_\_\_\_

Ex: Grandma

865-2968

$$8 + 6 + 5 + 2 + 9 + 6 + 8 = 44$$

Name

Number

Sum

---

---

---

---

---

---

---

---

---

---

