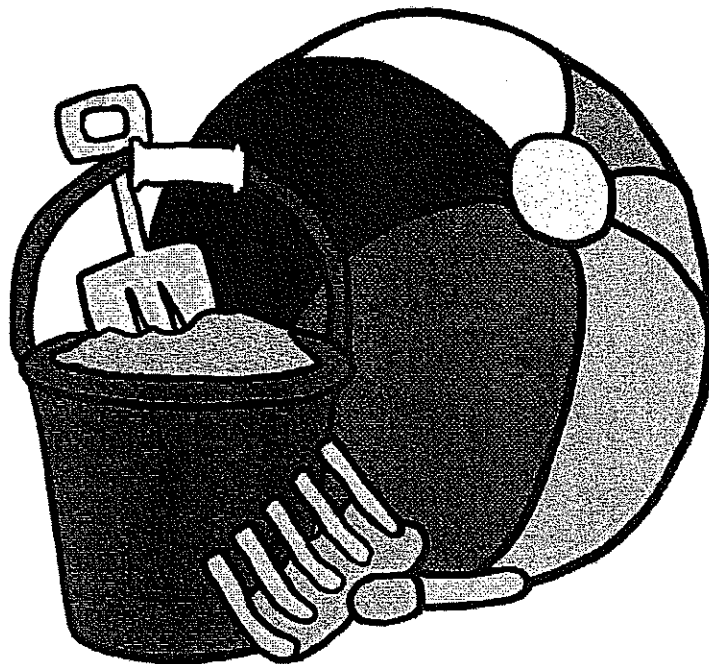


Ms. Foy's
Fourth Grade
Summer Math Packet



Due the first day of school!

Name: _____

MONDAY

1.) Write the number that is one more.

12, _____	99, _____	77, _____
_____	_____	_____
705, _____	439, _____	778, _____

2.) Circle the fraction that tells how much is shaded.



$\frac{3}{4}$ $\frac{1}{4}$ $\frac{1}{3}$



$\frac{1}{3}$ $\frac{2}{3}$ $\frac{2}{2}$



$\frac{3}{12}$ $\frac{7}{12}$ $\frac{5}{12}$

3.) Add:

$$\begin{array}{r} 6 \\ +7 \\ \hline \end{array} \quad \begin{array}{r} 8 \\ +8 \\ \hline \end{array} \quad \begin{array}{r} 9 \\ +7 \\ \hline \end{array} \quad \begin{array}{r} 9 \\ +6 \\ \hline \end{array} \quad \begin{array}{r} 3 \\ +8 \\ \hline \end{array} \quad \begin{array}{r} 9 \\ +4 \\ \hline \end{array} \quad \begin{array}{r} 8 \\ +6 \\ \hline \end{array}$$

4.) Multiply:

$$2 \times 3 = \underline{\quad\quad} \quad 4 \times 2 = \underline{\quad\quad}$$

$$6 \times 2 = \underline{\quad\quad} \quad 0 \times 4 = \underline{\quad\quad}$$

TUESDAY

1.) Add or Subtract:


$$\begin{array}{r} 49 \\ +36 \\ \hline \end{array} \quad \begin{array}{r} 56 \\ -38 \\ \hline \end{array} \quad \begin{array}{r} 91 \\ -38 \\ \hline \end{array} \quad \begin{array}{r} 76 \\ +19 \\ \hline \end{array} \quad \begin{array}{r} 54 \\ -28 \\ \hline \end{array}$$

2.) Write >, <, or =.

8 ○ 4 57 ○ 75 764 ○ 498

46 ○ 46 290 ○ 286 88 ○ 88

3.) Write the correct time for each clock.




WEDNESDAY

1.) Circle the greatest number in each group.

_____	_____	_____	_____
_____	_____	_____	_____
_____	_____	_____	_____

2.) There were 3 ponies. Sarah rode each pony 2 times. How many pony rides did Sarah take?



3.) What digit is in the tens place?

629 _____ 876 _____ 137 _____

503 _____ 329 _____ 986 _____

T
H
U
R
S
D
A
Y

1.) Count by twos.

Begin at 46. Stop at 56. _____

Begin at 578. Stop at 590. _____

Begin at 812. Stop at 822. _____

2.) Add or Subtract:

$\begin{array}{r} 460 \\ - 326 \\ \hline \end{array}$	$\begin{array}{r} 973 \\ - 390 \\ \hline \end{array}$	$\begin{array}{r} 864 \\ + 129 \\ \hline \end{array}$	$\begin{array}{r} 738 \\ + 191 \\ \hline \end{array}$
---	---	---	---

3.) Multiply:

$8 \times 3 = \underline{\quad}$	$2 \times 9 = \underline{\quad}$
$3 \times 3 = \underline{\quad}$	$4 \times 4 = \underline{\quad}$


F
R
I
D
A
Y

1.) Add:

$\begin{array}{r} 347 \\ + 317 \\ \hline \end{array}$	$\begin{array}{r} 368 \\ + 151 \\ \hline \end{array}$	$\begin{array}{r} 729 \\ + 108 \\ \hline \end{array}$
---	---	---


2.) Subtract:

$\begin{array}{r} 871 \\ - 348 \\ \hline \end{array}$	$\begin{array}{r} 940 \\ - 328 \\ \hline \end{array}$	$\begin{array}{r} 624 \\ - 182 \\ \hline \end{array}$
---	---	---



3.) Circle the odd numbers.

61 42 85 70 29 43 67 59 71



M
O
N
D
A
Y

1. Subtract:

$$\begin{array}{r} 640 \\ - 319 \\ \hline \end{array}$$

$$\begin{array}{r} 708 \\ - 345 \\ \hline \end{array}$$

$$\begin{array}{r} 950 \\ - 218 \\ \hline \end{array}$$

$$\begin{array}{r} 509 \\ - 263 \\ \hline \end{array}$$

2.) Circle the number that is less.

62	65	206	260	51	62
80	83	708	700	638	632

3.) What place is each 4 in? (Hundreds-H, Tens-T, Ones-O)

340 _____ 426 _____ 914 _____
 624 _____ 347 _____ 430 _____



T
U
E
S
D
A
Y

1.) Use the calendar to answer these questions.

What day of the week is June 19? _____

What is the day of the:

First Monday _____

Third Saturday _____

Second Friday _____

Fourth Sunday _____



June



Sun.	Mon.	Tues	W--	----	----	----

W
E
D
N
E
S
D
A
Y



1.) Write the numbers in order. Begin with the least number.

428, 308, 126, 825: _____

108, 101, 603, 202: _____

729, 646, 421, 527: _____

826, 757, 426, 926: _____

2.) Solve:

$$\begin{array}{r} 942 \\ - 681 \\ \hline \end{array}$$

$$\begin{array}{r} 826 \\ - 552 \\ \hline \end{array}$$

$$\begin{array}{r} 629 \\ + 143 \\ \hline \end{array}$$

$$\begin{array}{r} 275 \\ + 181 \\ \hline \end{array}$$

3.) Solve:

$$\begin{array}{r} 3 \\ \times 4 \\ \hline \end{array}$$

$$\begin{array}{r} 2 \\ \times 9 \\ \hline \end{array}$$

$$\begin{array}{r} 5 \\ \times 0 \\ \hline \end{array}$$



T
H
U
R
S
D
A
Y

1.) Compare the numbers. Use >, <, or =.

82 ○ 93

84 ○ 76

38 ○ 38

~~97 ○ 79~~


364 ○ 438

976 ○ 846

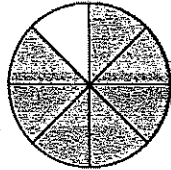
396 ○ 476

804 ○ 804


2.) How much is shaded?



$\frac{6}{12}$ $\frac{9}{12}$ $\frac{7}{12}$



$\frac{1}{8}$ $\frac{5}{8}$ $\frac{7}{8}$




$\frac{1}{2}$ $\frac{1}{3}$ $\frac{1}{4}$



F
R
I
D
A
Y


1.) There were 26 rabbits and 35 hamsters.

There were how many more hamsters than rabbits? _____



2.) Patrick rode his bike 176 blocks in the morning and 215 blocks in the afternoon. How many blocks did he ride in all?

3.) Take a multiplication speed-up. Have a parent check it. Practice the ones you missed.



M
O
N
D
A
Y

1.) Write the number that is one less.

____, 64	____, 300	____, 546	____, 58	____, 468	____, 387
____, 70	____, 500	____, 440	____, 38	____, 461	____, 559
____, 90	____, 521	____, 700	____, 40	____, 892	____, 170

2.) Multiply:

0	4	1	3	8	9	2	4	5	9	3	4
<u>x 3</u>	<u>x 3</u>	<u>x 7</u>	<u>x 7</u>	<u>x 2</u>	<u>x 3</u>	<u>x 6</u>	<u>x 4</u>	<u>x 3</u>	<u>x 2</u>	<u>x 8</u>	<u>x 2</u>

T
U
E
S
D
A
Y

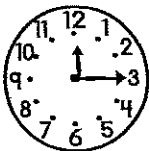
1.) Add or Subtract:

789	497	658	336
<u>- 545</u>	<u>- 389</u>	<u>- 422</u>	<u>+ 248</u>

2.) Circle the odd numbers.

64	51	93	80
47	39	42	55

3.) Write the correct time.



W
E
D
N
E
S
D
A
Y

1.) Round each number to the nearest ten.

86 _____	34 _____	83 _____	72 _____	88 _____
75 _____	65 _____	92 _____	28 _____	41 _____
25 _____	77 _____	53 _____	39 _____	54 _____



2.)

5944	6287	6978	7380
<u>- 1732</u>	<u>- 3145</u>	<u>- 2424</u>	<u>- 4170</u>


T
H
U
R
S
D
A
Y

1.) Add:

28	63	27	386
34	18	30	203
<u>+ 22</u>	<u>+ 24</u>	<u>+ 42</u>	<u>+ 403</u>

2.) ~~Take a subtraction speed-up.~~
~~Have a parent check it.~~
~~Practice the ones you missed.~~


2.) How many?



Sides _____

Corners _____

Square Corners _____



Sides _____

Corners _____

Square Corners _____


F
R
I
D
A
Y

1.) Write each number in standard form.

- ❖ five hundred, two _____
- ❖ three hundred, thirty-four _____
- ❖ four thousand, three hundred, twenty-two _____
- ❖ seven thousand, two hundred, nine _____

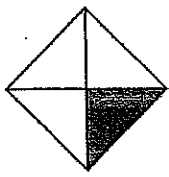


2.) Rivers picked 1,429 strawberries and 743 blueberries. How many berries did Rivers pick in all? _____



M
O
N
D
A
Y

1.) What fraction is shaded?



$\frac{1}{4}$ $\frac{1}{3}$ $\frac{1}{2}$



$\frac{1}{4}$ $\frac{1}{3}$ $\frac{1}{2}$

2.) Subtract:

$$\begin{array}{r} 450 \\ - 228 \\ \hline \end{array}$$

$$\begin{array}{r} 705 \\ - 372 \\ \hline \end{array}$$



3.) Write each missing number.

8 6 14

_____ + _____ = 14

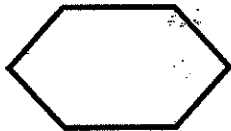
14 - _____ = 8

_____ + _____ = 14

14 - _____ = 6


T
U
E
S
D
A
Y

1.) How many sides?




_____ sides

2.) Circle the triangle.



3.) How much money?




_____ ¢

4.) Add:

$$\begin{array}{r} 268 \\ + 439 \\ \hline \end{array}$$

$$\begin{array}{r} 638 \\ + 188 \\ \hline \end{array}$$

5.) Continue the pattern.



W
E
D
N
E
S
D
A
Y

1.) Circle the fraction that is shaded.



$\frac{3}{4}$ $\frac{2}{5}$ $\frac{3}{5}$



$\frac{3}{8}$ $\frac{4}{8}$ $\frac{5}{8}$



$\frac{2}{6}$ $\frac{4}{6}$ $\frac{2}{4}$

2.) Circle the one that shows a line of symmetry.



3.) Subtract:

$$\begin{array}{r} 264 \\ - 138 \\ \hline \end{array}$$

$$\begin{array}{r} 509 \\ - 182 \\ \hline \end{array}$$

$$\begin{array}{r} 721 \\ - 319 \\ \hline \end{array}$$

$$\begin{array}{r} 569 \\ - 284 \\ \hline \end{array}$$

4.) **Take a combination (+, -) speed-up.**

T
H
U
R
S
D
A
Y

1.) Write the number that comes:

after	before	between
262, _____	_____, 415	693, _____, 695
189, _____	_____, 773	966, _____, 968
476, _____	_____, 280	439, _____, 441
449, _____	_____, 900	488, _____, 490

2.) Multiply:

$$\begin{array}{r} 2 \\ \times 4 \\ \hline \end{array}$$

$$\begin{array}{r} 3 \\ \times 4 \\ \hline \end{array}$$


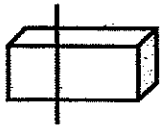
$$\begin{array}{r} 8 \\ \times 4 \\ \hline \end{array}$$

$$\begin{array}{r} 6 \\ \times 3 \\ \hline \end{array}$$

$$\begin{array}{r} 5 \\ \times 0 \\ \hline \end{array}$$

$$\begin{array}{r} 1 \\ \times 8 \\ \hline \end{array}$$

3.) Circle the figure that shows a line of symmetry.



F
R
I
D
A
Y

1.) Add or Subtract:

$$\begin{array}{r} 629 \\ + 138 \\ \hline \end{array}$$

$$\begin{array}{r} 761 \\ - 328 \\ \hline \end{array}$$

$$\begin{array}{r} 934 \\ - 492 \\ \hline \end{array}$$

$$\begin{array}{r} 368 \\ + 291 \\ \hline \end{array}$$

$$\begin{array}{r} 729 \\ + 148 \\ \hline \end{array}$$

$$\begin{array}{r} 630 \\ - 318 \\ \hline \end{array}$$

$$\begin{array}{r} 567 \\ + 192 \\ \hline \end{array}$$



It's almost
time to celebrate!

Go for
a swim!

You have completed
Week #4!



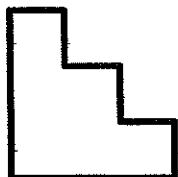
M
O
N
D
A
Y

1.) Circle the fraction that shows what part of the group is shaded.




$$\frac{9}{6} \quad \frac{3}{9} \quad \frac{6}{9} \quad \frac{9}{3}$$

2.) How many sides?



3.) Write the time for each clock.







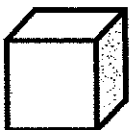
4.) Add:

$$\begin{array}{r} 298 \\ + 146 \\ \hline \end{array}$$

$$\begin{array}{r} 308 \\ + 219 \\ \hline \end{array}$$

T
U
E
S
D
A
Y

1.) Draw lines to match each shape word with 2 shape pictures.



Sphere

Cylinder

Cone

Rectangular Prism

Cube



W
E
D
N
E
S
D
A
Y

1.) Write the number.

3 hundreds, 2 tens, 5 ones _____

8 hundreds, 6 tens, 5 ones _____

9 hundreds, 0 tens, 7 ones _____

2.) Add:

$$\begin{array}{r} 625 \\ + 286 \\ \hline \end{array}$$

$$\begin{array}{r} 463 \\ + 258 \\ \hline \end{array}$$



3.) Circle the even numbers.

84 61 290 828 973

50 98 735 732 480

4.) Multiply:


$$\begin{array}{r} 2 \\ \times 7 \\ \hline \end{array} \quad \begin{array}{r} 5 \\ \times 3 \\ \hline \end{array} \quad \begin{array}{r} 7 \\ \times 3 \\ \hline \end{array} \quad \begin{array}{r} 4 \\ \times 4 \\ \hline \end{array} \quad \begin{array}{r} 5 \\ \times 6 \\ \hline \end{array} \quad \begin{array}{r} 8 \\ \times 2 \\ \hline \end{array} \quad \begin{array}{r} 9 \\ \times 3 \\ \hline \end{array} \quad \begin{array}{r} 7 \\ \times 4 \\ \hline \end{array} \quad \begin{array}{r} 2 \\ \times 5 \\ \hline \end{array}$$

T
H
U
R
S
D
A
Y

1.) Write each money amount.



_____ ¢



_____ ¢



_____ ¢

2.) Circle the shape that comes next in the pattern.



~~3.) Take a multiplication speed-up!~~


F
R
I
D
A
Y

1.) James won the game. He moved ahead 9 spaces and then 7 spaces. How many spaces did he move altogether in his last two turns?

2.) How many?

sides _____

corners _____



3.) Round each number to the nearest ten.

72 _____ 65 _____ 18 _____

49 _____ 79 _____ 12 _____

4.) Add:

2346	4772	6809	1478
+ 2122	+ 2214	+ 2150	+ 3221

